

# Relief and Vertical Interval Work Sheet

1) In map reading the term relief means what?

- The rise and fall of the ground.
- A release from anxiety or tension.
- Getting back to camp safe.

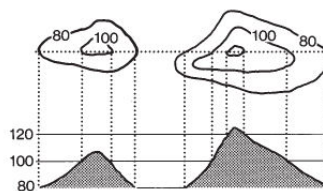
2) Which one of these is not a method of showing vertical relief?

- Hachures.
- Contours.
- Shadows.
- Layering (Altitude Tint).

3) Tick the correct description of the following examples of contours;

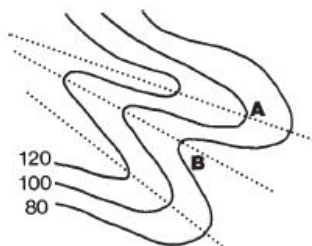
a)

- Separate Hills
- A Saddle
- Steep Valley



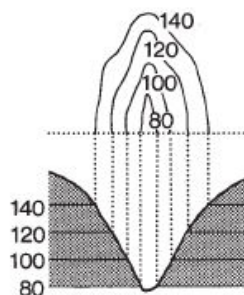
b)

- A** is a Spur and **B** is a Re-entrant
- B** is a Spur and **A** is a Re-entrant
- A** and **B** are Spurs



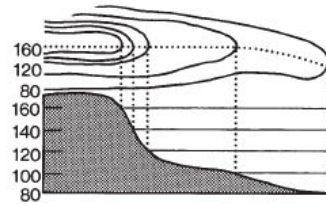
c)

- Separate Hills
- A Saddle
- Steep Valley



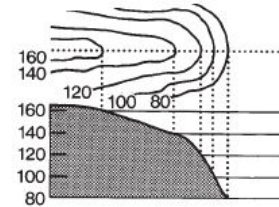
d)

- A Concave Slope
- A Convex Slope
- Neither of these



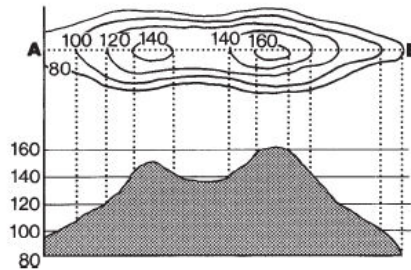
e)

- A Concave Slope
- A Convex Slope
- Neither of these



f)

- Separate Hills
- A Saddle
- Steep Valley



Total Points \_\_\_\_/8 Percentage \_\_\_\_%